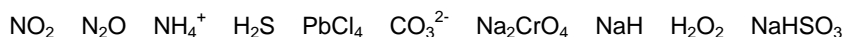


AS REDOX RECAP

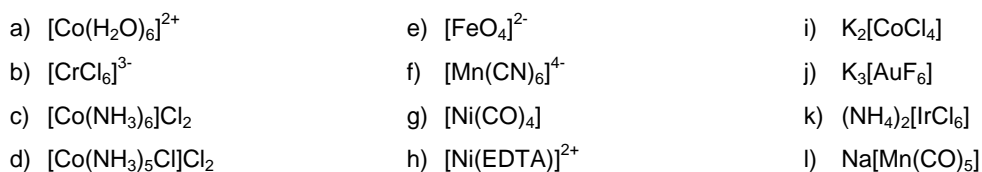


Name Form

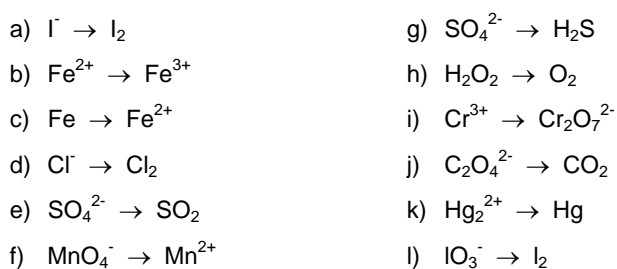
- 1) Give the oxidation state of all the elements in the following species.



- 2) Give the oxidation state of the transition metal in each of the following species.



- 3) Write half equations for each of the following conversions.



- 4) Write redox equations for each of the following reactions, using your equations from question 3.



- 5) Which of the following are redox reactions?

